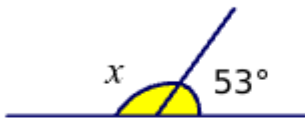




Q1

0/6

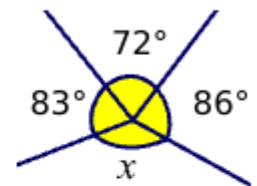
Find the angle x :



$x =$ $^\circ$ [1]



$x =$ $^\circ$ [1]

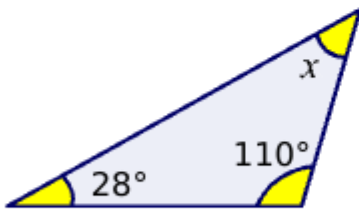


$x =$ $^\circ$ [1]

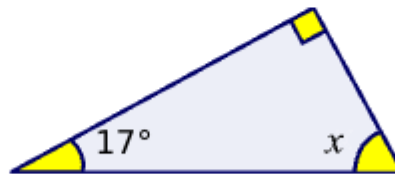
Q2

0/6

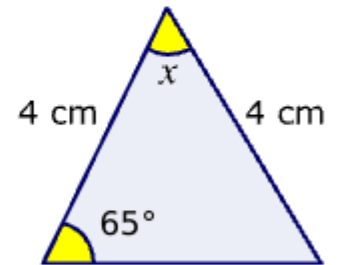
No calc



$x =$ $^\circ$ [1]



$x =$ $^\circ$ [1]



$x =$ $^\circ$ [1]

Total

0/12

Mark it

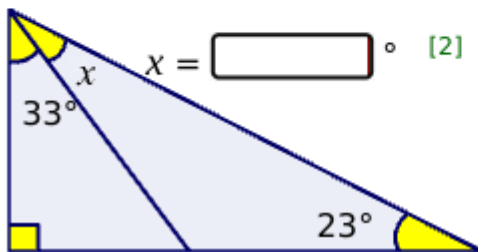


Q1

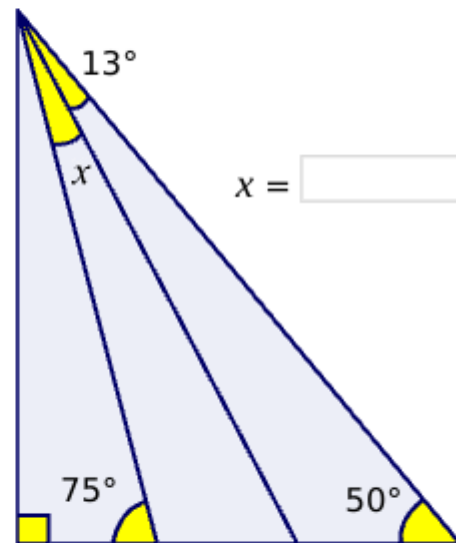
0/6

Find the angle x :

You can drag this box to label angles if you need to. $^\circ$



$x =$ $^\circ$ [2]

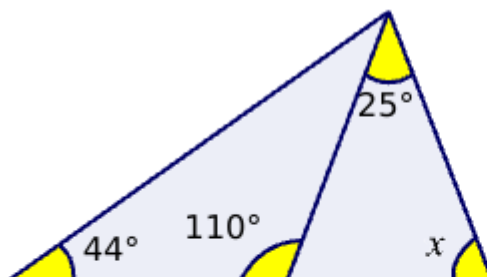


$x =$ $^\circ$ [2]

Q2

0/6

No calc



$x =$ $^\circ$ [2]

Total

0/12

Mark it